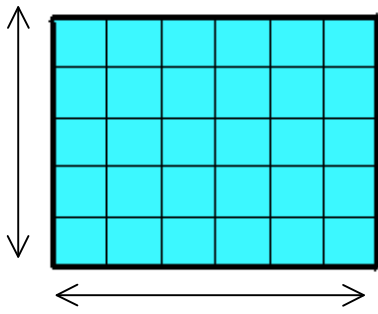
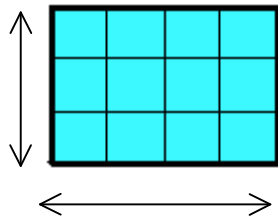


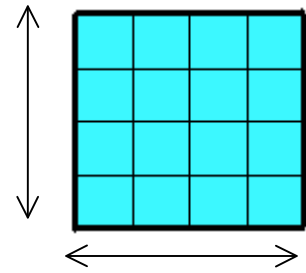
**Entraînement 1** Calcule les aires des figures suivantes .



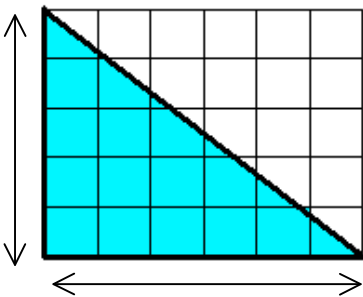
Aire = longueur x largeur  
 = ..... x .....  
 = .....



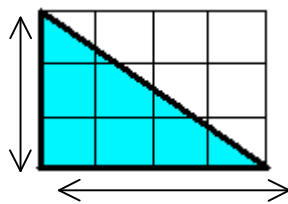
Aire = longueur x largeur  
 = ..... x .....  
 = .....



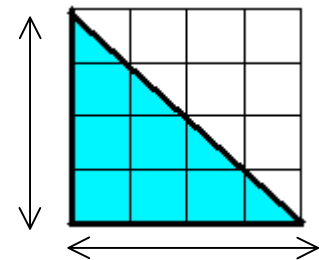
Aire = longueur x largeur  
 = ..... x .....  
 = .....



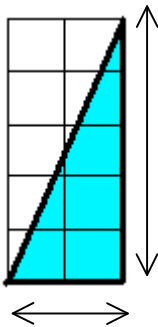
Aire = ( longueur x largeur ) : 2  
 = ( ..... x ..... ) : 2  
 = ..... : 2  
 = .....



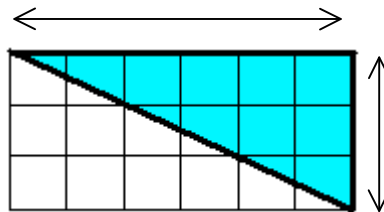
Aire = ( longueur x largeur ) : 2  
 = ( ..... x ..... ) : 2  
 = ..... : 2  
 = .....



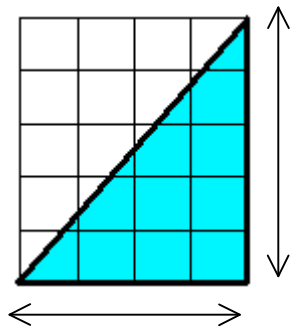
Aire = ( longueur x largeur ) : 2  
 = ( ..... x ..... ) : 2  
 = ..... : 2  
 = .....



Aire = ( longueur x largeur ) : 2  
 = ( ..... x ..... ) : 2  
 = ..... : 2



Aire = ( longueur x largeur ) : 2  
 = ( ..... x ..... ) : 2  
 = ..... : .....  
 = .....



Aire = ( longueur x largeur ) : 2  
 = ( ..... x ..... ) : .....  
 = ..... : .....

**Entraînement 2** Mesure et calcule les aires des figures suivantes .

