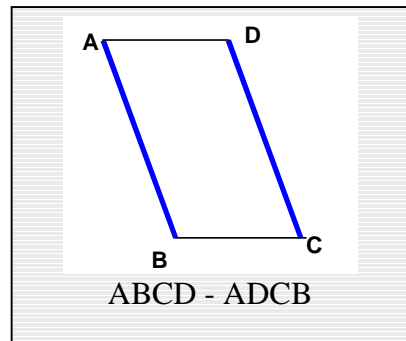
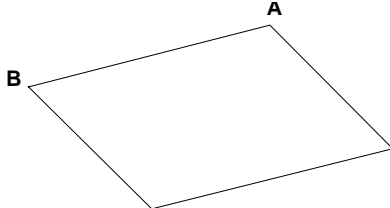
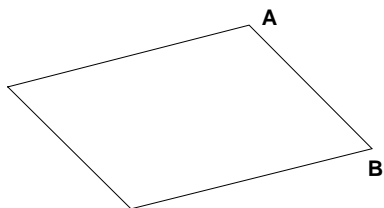
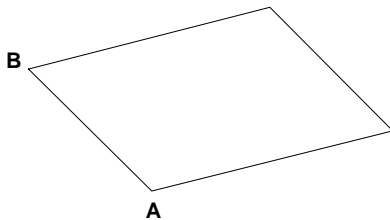
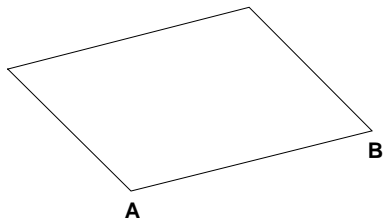
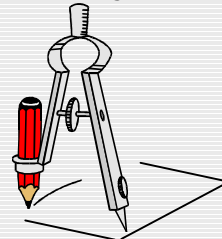


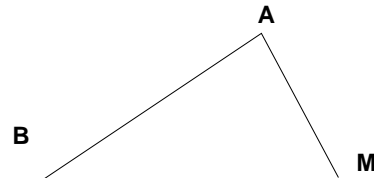
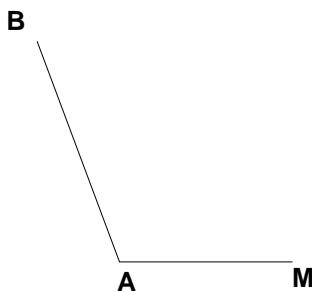
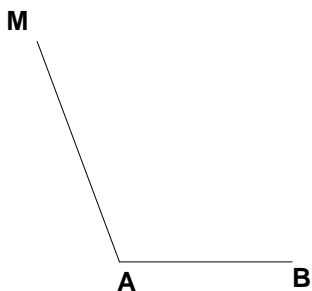
**Entraînement 1** Les quadrilatères suivants sont des parallélogrammes.  
Place les points M et N vérifiant : **ABNM est un parallélogramme**



Pour placer le point C, il faut reporter la longueur AB et la longueur AD avec le compas.



**Entraînement 2** Place dans chaque cas le point N tel que : **BAMN est un parallélogramme**



B  
×

M  
×

M  
×

×

×

×

×

×

×

M  
×

B  
×

×

M

A  
×

A  
×

A  
×

×

B

×

M

×

B

