

Entraînement 1

$$\pi \approx 3,141592654 \dots \dots \dots$$

$$\approx 3,14 \text{ arrondi}$$

$$\pi \times 2 \approx 3,14 \times 2$$

$$\approx \dots \dots \dots$$

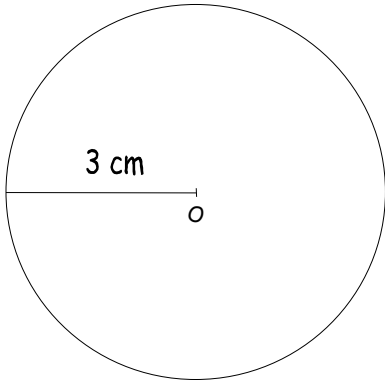
$$\pi \times 10 \approx \dots \dots \dots$$

$$\approx \dots \dots \dots$$

$$\pi \times 2 \times 3,5 \approx \dots \dots \dots$$

$$\approx \dots \dots \dots$$

Entraînement 2 : Complète les pointillés et calcule la longueur des cercles



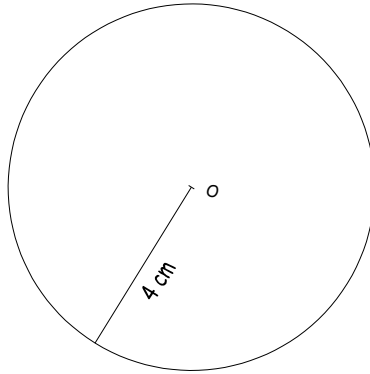
$$L_{\text{cercle}} = \pi \times 2 \times \text{rayon}$$

$$= 3,14 \times 2 \times \dots \dots \dots$$

$$= 3,14 \times \dots \dots \dots$$

$$= \dots \dots \dots$$

$$L_{\text{cercle}} = \dots \dots \dots \text{ cm}$$



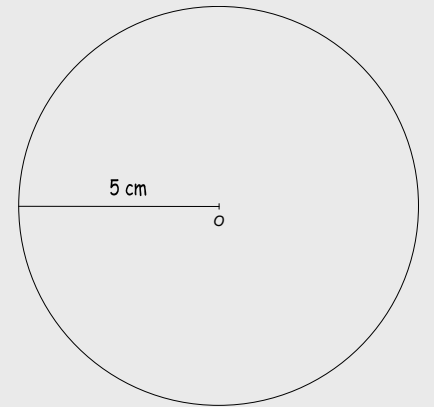
$$L_{\text{cercle}} = \pi \times 2 \times \text{rayon}$$

$$= 3,14 \times 2 \times \dots \dots \dots$$

$$= 3,14 \times \dots \dots \dots$$

$$= \dots \dots \dots$$

$$L_{\text{cercle}} = \dots \dots \dots \text{ cm}$$



$$L_{\text{cercle}} = \pi \times 2 \times \text{rayon}$$

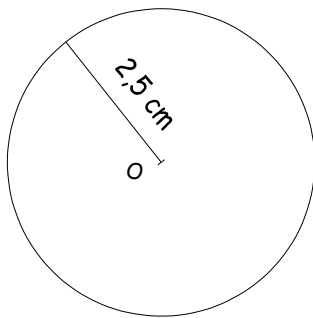
$$= 3,14 \times 2 \times 5$$

$$= 3,14 \times 10$$

$$= 31,4$$

$$L_{\text{cercle}} = 31,4 \text{ cm}$$

La longueur d'un cercle de rayon 5 cm est de 31,4 cm



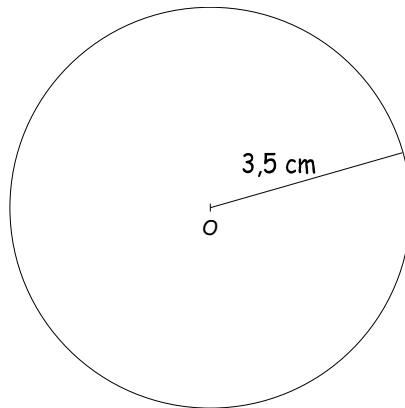
$$L_{\text{cercle}} = \pi \times 2 \times \text{rayon}$$

$$= 3,14 \times \dots \dots \times \dots \dots \dots$$

$$= 3,14 \times \dots \dots \dots$$

$$= \dots \dots \dots$$

$$L_{\text{cercle}} = \dots \dots \dots \text{ cm}$$



$$L_{\text{cercle}} = \pi \times 2 \times \text{rayon}$$

$$= \dots \dots \times \dots \dots \times \dots \dots \dots$$

$$= \dots \dots \times \dots \dots \dots$$

$$= \dots \dots \dots$$

$$L_{\text{cercle}} = \dots \dots \dots \text{ cm}$$

