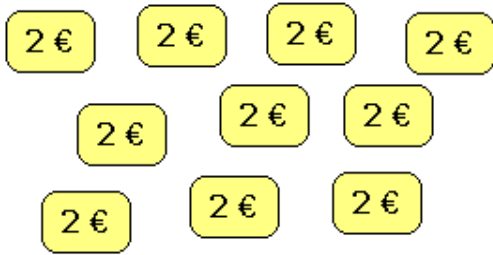


Entraînement 1 Complète les pointillés

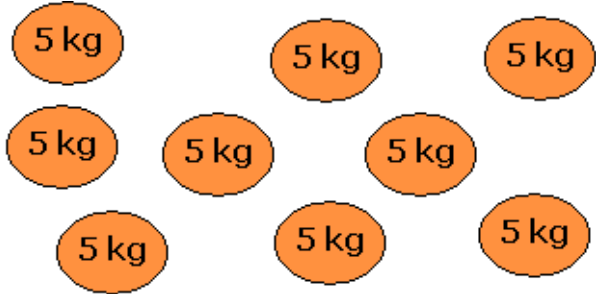
10 paquets de 2 €



$$2 + 2 + 2 + 2 + 2 + 2 + 2 + 2 + 2 + 2$$

$$= 10 \times \dots = \dots$$

9 paquets de 5 kg



$$\dots + \dots + \dots + \dots + \dots + \dots + \dots + \dots + \dots$$

$$= 9 \times \dots = \dots$$

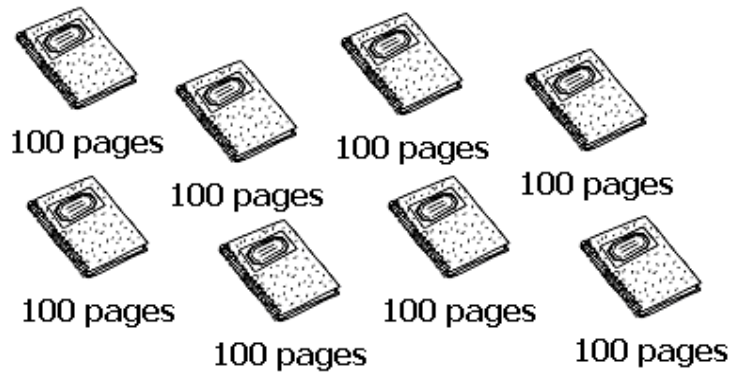
7 verres de 3 €



$$\dots + \dots + \dots + \dots + \dots + \dots + \dots$$

$$= \dots \times \dots = \dots$$

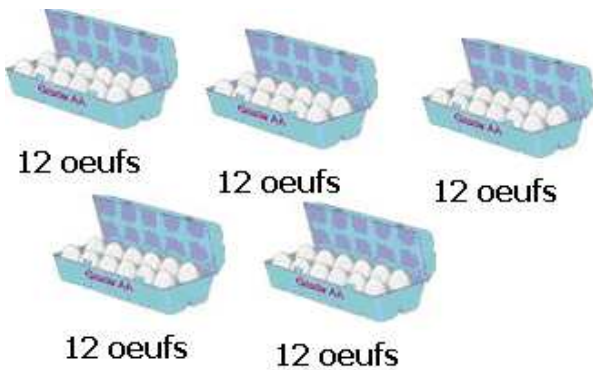
8 cahiers de 100 pages



$$\dots + \dots + \dots + \dots + \dots + \dots + \dots + \dots$$

$$= \dots \times \dots = \dots$$

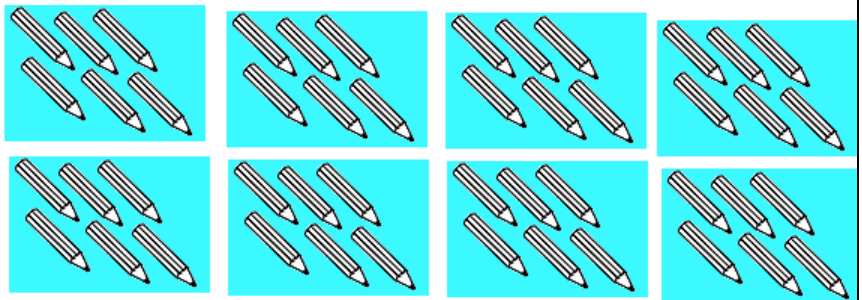
5 boîtes de 12 œufs



$$\dots + \dots + \dots + \dots + \dots$$

$$= \dots \times \dots = \dots$$

8 boîtes de 6 stylos



$$\dots + \dots + \dots + \dots + \dots + \dots + \dots + \dots$$

$$= \dots \times \dots = \dots$$

