
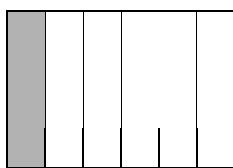


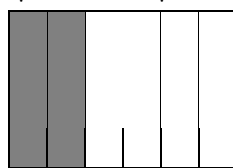
Entraînement 1 Indique la fraction de surface correspondant à la partie colorée :



.....
.....



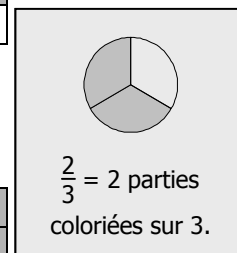
.....
.....




.....
.....




.....
.....




Entraînement 2 Indique la fraction de surface correspondant à la partie colorée :



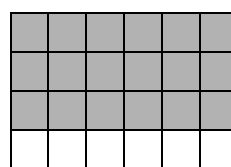
$$\frac{\dots}{24} = \frac{\dots}{4}$$



$$\frac{\dots}{24} = \frac{\dots}{6}$$




$$\frac{\dots}{24} = \frac{\dots}{6}$$




$$\frac{\dots}{24} = \frac{\dots}{4}$$


Entraînement 3 Dans chaque rectangle, colorie une partie correspondant à la fraction donnée :




$$\frac{3}{20}$$




$$\frac{7}{20}$$




$$\frac{10}{20}$$



$$\frac{1}{2}$$



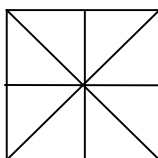
$$\frac{1}{4}$$



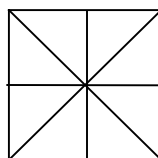
$$\frac{1}{5}$$

Entraînement 4 Colorie une partie du carré correspondant à la fraction donnée.

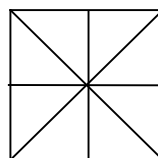
$$\frac{4}{8}$$



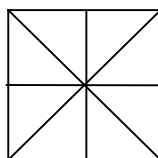
$$\frac{2}{8}$$



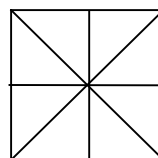
$$\frac{6}{8}$$



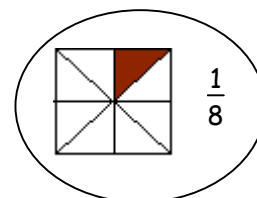
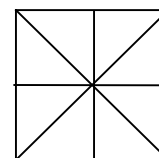
$$\frac{8}{8}$$



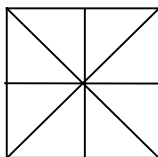
$$\frac{5}{8}$$



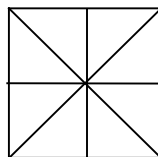
$$\frac{7}{8}$$



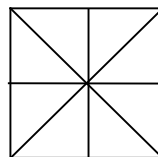
$$\frac{1}{2}$$



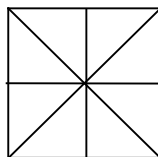
$$\frac{1}{4}$$



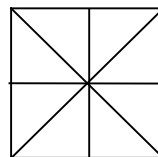
$$\frac{3}{4}$$



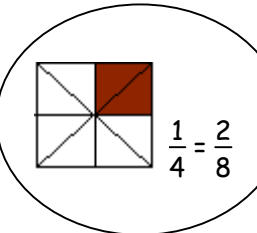
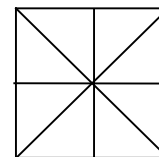
$$\frac{1}{2}$$



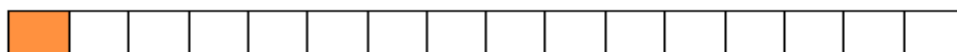
$$\frac{2}{4}$$



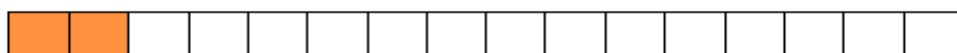
$$\frac{9}{8}$$



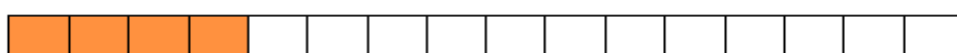
Entraînement 5 Colorie une partie du carré correspondant à la fraction donnée



$$\frac{\dots}{16}$$



$$\frac{1}{8} = \frac{\dots}{16}$$



$$\frac{1}{4} = \frac{\dots}{8} = \frac{\dots}{16}$$



$$\frac{1}{2} = \frac{\dots}{4} = \frac{\dots}{8} = \frac{\dots}{16}$$

