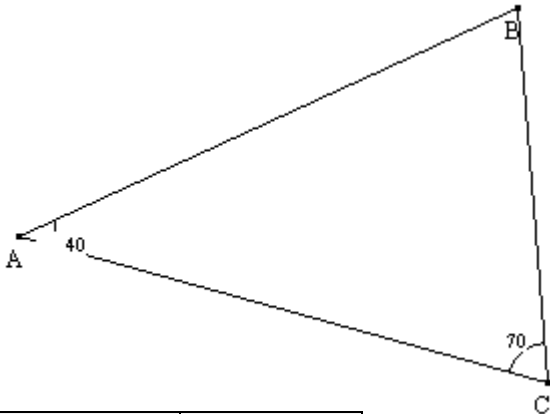
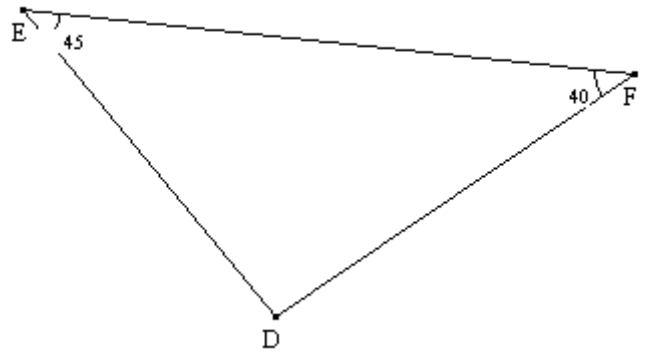
 **Entraînement** Calcule les angles manquants

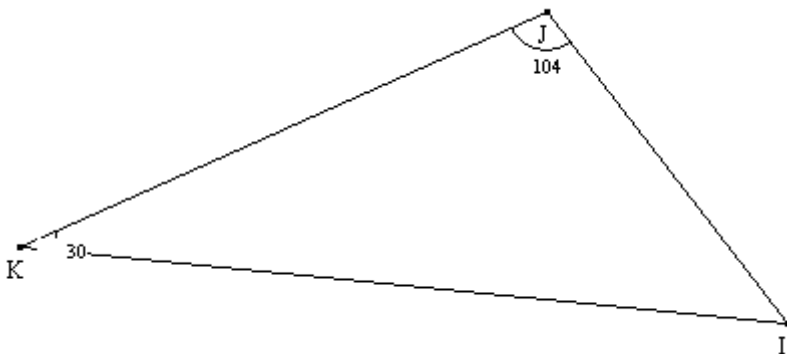


Angles	Mesure
$\widehat{D}$	
$\widehat{E}$	45
$\widehat{F}$	
Somme	180

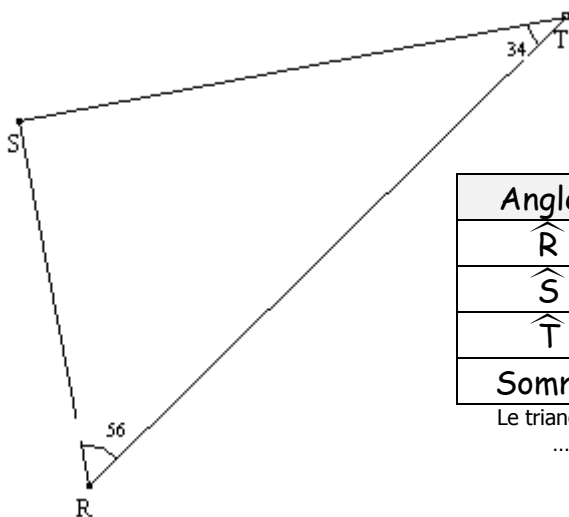
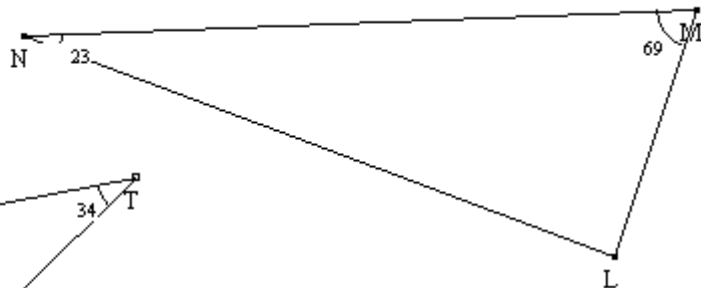
Angles	Mesure
$\widehat{A}$	40
$\widehat{B}$	.....
$\widehat{C}$	70
Somme	180



Angles	Mesure
$\widehat{I}$	
$\widehat{J}$	
$\widehat{K}$	
Somme	



Angles	Mesure
$\widehat{L}$	
$\widehat{M}$	
$\widehat{N}$	
Somme	



Angles	Mesure
$\widehat{R}$	
$\widehat{S}$	
$\widehat{T}$	
Somme	

Le triangle RST est un triangle .....

